

ESCOLA _____ DATA: ____/____/____

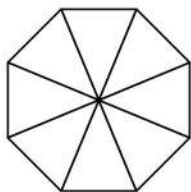
PROF: _____ TURMA: _____

NOME: _____

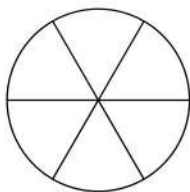


Frações

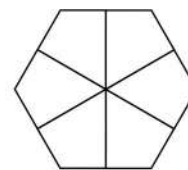
Represente as frações, pintando corretamente os diagramas:



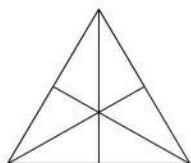
$$\frac{1}{2}$$



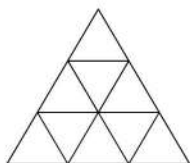
$$\frac{5}{6}$$




$$\frac{1}{3}$$



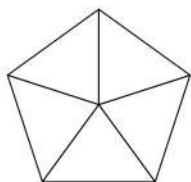
$$\frac{2}{3}$$



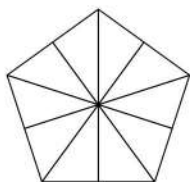
$$\frac{2}{9}$$



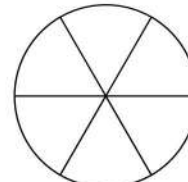
$$\frac{4}{5}$$



$$\frac{3}{5}$$



$$\frac{2}{5}$$



$$\frac{1}{6}$$

ESCOLA _____ DATA: ____/____/____


PROF: _____ TURMA: _____

NOME: _____




FRAÇÕES


Pinte, corretamente, as frações abaixo:




$$\frac{1}{5}$$



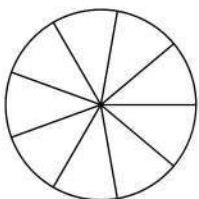
$$\frac{2}{5}$$



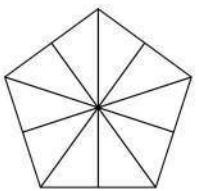
$$\frac{3}{5}$$



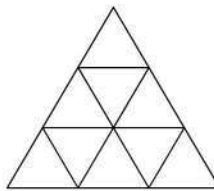
$$\frac{4}{5}$$



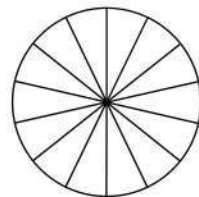
$$\frac{4}{9}$$



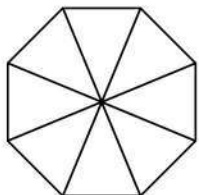
$$\frac{6}{10}$$



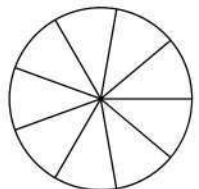
$$\frac{8}{9}$$



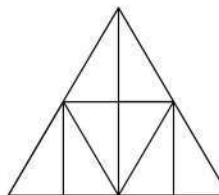
$$1$$



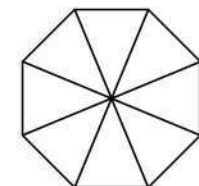
$$\frac{1}{8}$$



$$\frac{4}{5}$$



$$\frac{5}{8}$$



$$\frac{7}{8}$$

ESCOLA _____ DATA: ____/____/____


PROF: _____ TURMA: _____

NOME: _____

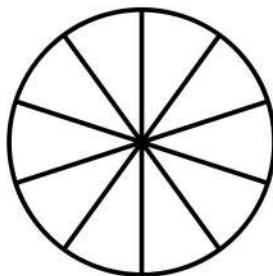


FRAÇÕES

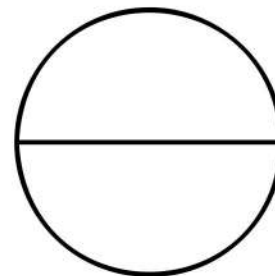
Pinte as frações corretamente



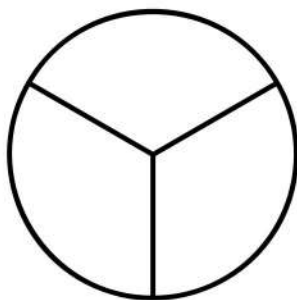
$3/4$




$7/10$




$1/2$



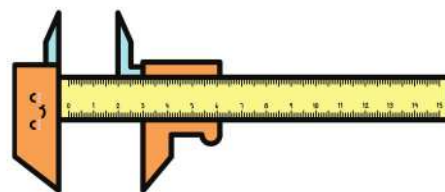

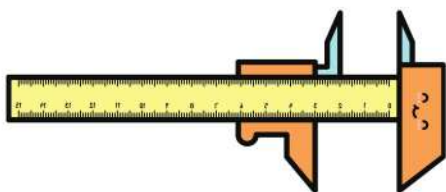
$1/3$



$2/7$



$2/5$



ESCOLA _____ DATA: ____ / ____ / ____

PROF: _____ TURMA: _____

NOME: _____




Represente
as

FRAÇÕES



$$\frac{3}{4}$$




$$\frac{1}{3}$$



$$\frac{1}{6}$$



$$\frac{2}{5}$$



ESCOLA _____ DATA: ____ / ____ / ____

PROF: _____ TURMA: _____

NOME: _____




Represente
as


FRAÇÕES




$$\frac{3}{4}$$



$$\frac{2}{3}$$



$$\frac{1}{2}$$



$$\frac{4}{6}$$

