

ESCOLA _____ DATA: ____/____/____

PROF: _____ TURMA: _____

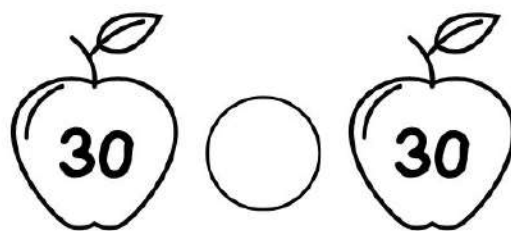









NOME: _____



Compare as maçãs

Compare os números nas maçãs usando os sinais de

< = >



ESCOLA _____ DATA: ____/____/____


PROF: _____ TURMA: _____

NOME: _____




Maior, menor ou igual


> maior que



= igual a



< menor que



40 ○ 45

34 ○ 34

15 ○ 23

28 ○ 82

78 ○ 12

24 ○ 24

50 ○ 50

84 ○ 51

90 ○ 98

12 ○ 67

ESCOLA _____ DATA: ____/____/____

PROF: _____ TURMA: _____

NOME: _____



COMPARE OS NÚMEROS

COMPARE OS NÚMEROS USANDO OS SINAIS ABAIXO:



MAIOR QUE



IGUAL A



MENOR QUE

10 11

13 34

34 34

14 23

15 26

22 24

17 11

25 21

26 12

12 12

30 22

17 16

11 13

27 27

24 22

21 27

22 23

11 10

19 22

14 15

38 25

8 11

11 15

33 33

ESCOLA _____ DATA: ____/____/____







PROF: _____ TURMA: _____

NOME: _____



COMPARE AS QUANTIDADES

COMPARE OS ELEMENTOS ABAIXO USANDO OS SINAIS DE MAIOR, MENOR OU IGUAL



> MAIOR QUE

< MENOR QUE

= IGUAL A