

ESCOLA \_\_\_\_\_ DATA: \_\_\_\_/\_\_\_\_/\_\_\_\_


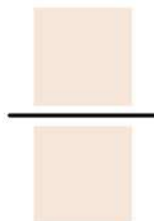

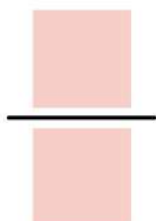
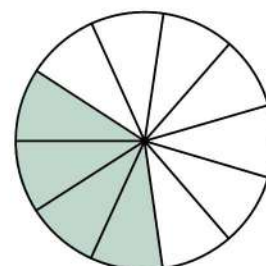
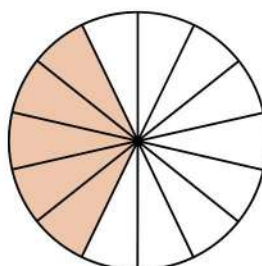
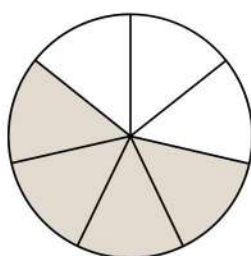
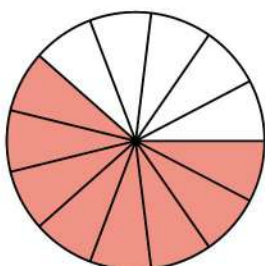

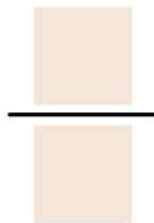

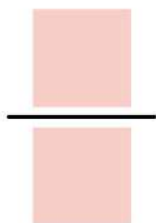
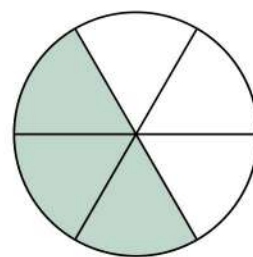
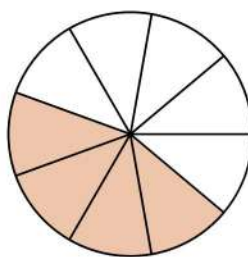
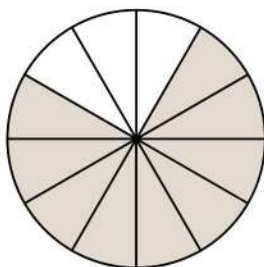
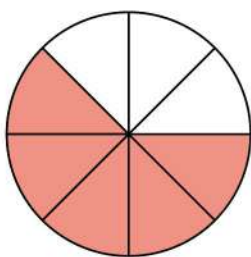
PROF: \_\_\_\_\_ TURMA: \_\_\_\_\_

NOME: \_\_\_\_\_



# frações

Identifique as frações abaixo



ESCOLA \_\_\_\_\_ DATA: \_\_\_\_/\_\_\_\_/\_\_\_\_


PROF: \_\_\_\_\_ TURMA: \_\_\_\_\_

NOME: \_\_\_\_\_

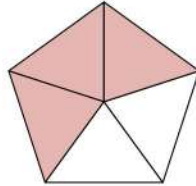


# FRAÇÕES

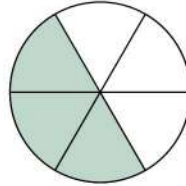
Identifique as frações abaixo



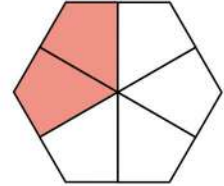
$\frac{4}{5}$
---------------



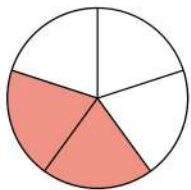
_____
-------



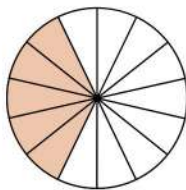
_____
-------



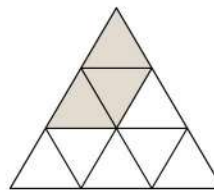
_____
-------



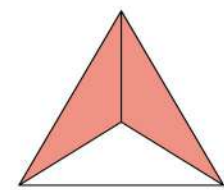
_____
-------



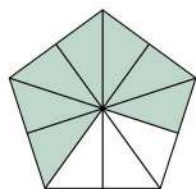
_____
-------



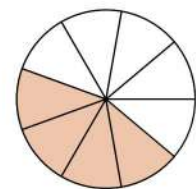
_____
-------



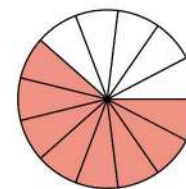
_____
-------



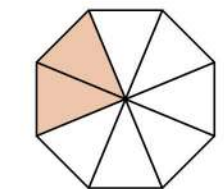
_____
-------



_____
-------



_____
-------



_____
-------

ESCOLA \_\_\_\_\_ DATA: \_\_\_\_/\_\_\_\_/\_\_\_\_

PROF: \_\_\_\_\_ TURMA: \_\_\_\_\_

NOME: \_\_\_\_\_



# Frações



Complete o quadro abaixo, conforme o modelo:

	Fração	Por extenso
	$\frac{1}{2}$	um meio

ESCOLA \_\_\_\_\_ DATA: \_\_\_\_/\_\_\_\_/\_\_\_\_

PROF: \_\_\_\_\_ TURMA: \_\_\_\_\_

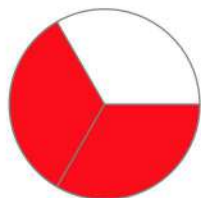
NOME: \_\_\_\_\_



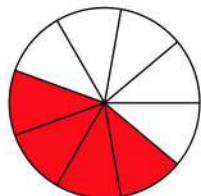
## FRAÇÕES



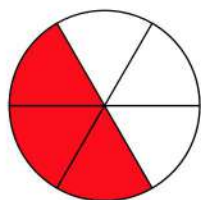
Ligue as frações as suas representações



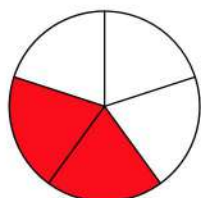
$2/5$



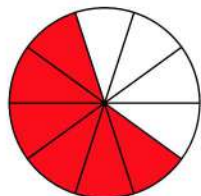
$3/6$



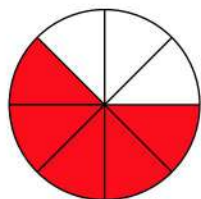
$5/8$



$4/9$



$2/3$



$6/10$