


ESCOLA _____ DATA: ____/____/____

PROF: _____ TURMA: _____

NOME: _____




RESOLVA

 $4 - 1 = 3$

 $4 - 3 = ?$

 $3 - 1 = ?$

 $3 - 2 = ?$

 $2 - 1 = ?$

 $5 - 3 = ?$


ESCOLA _____ DATA: ____ / ____ / ____

PROF: _____ TURMA: _____

NOME: _____



RESOLVA

 $4 - 1 = 3$

 $4 - 2 = ?$

 $5 - 3 = ?$

 $5 - 4 = ?$

 $3 - 2 = ?$

 $4 - 3 = ?$


ESCOLA _____ DATA: ____/____/____

PROF: _____ TURMA: _____

NOME: _____



RESOLVA

 $4 - 1 = 3$

 $4 - 2 = ?$

 $3 - 2 = ?$

 $5 - 2 = ?$

 $5 - 4 = ?$

 $2 - 1 = ?$

ESCOLA _____ DATA: ____/____/____

PROF: _____ TURMA: _____

NOME: _____



RESOLVA



$$3 - 1 = 2$$



$$4 - 2 = ?$$



$$4 - 3 = ?$$



$$3 - 2 = ?$$



$$3 - 1 = ?$$



$$2 - 1 = ?$$

ESCOLA _____ DATA: ____/____/____

PROF: _____ TURMA: _____

NOME: _____



RESOLVA

 $3 - 1 = 2$

 $3 - 2 = ?$

 $2 - 1 = ?$

 $4 - 2 = ?$

 $3 - 3 = ?$

 $4 - 3 = ?$

ESCOLA _____ DATA: ____/____/____

PROF: _____ TURMA: _____

NOME: _____



RESOLVA

 $3 - 2 = 2$

 $3 - 1 = ?$

 $3 - 3 = ?$

 $4 - 2 = ?$

 $4 - 3 = ?$

 $4 - 1 = ?$


ESCOLA _____ DATA: ____/____/____

PROF: _____ TURMA: _____

NOME: _____



RESOLVA

 $4 - 1 = 3$

 $4 - 2 = ?$

 $5 - 3 = ?$

 $5 - 2 = ?$

 $3 - 2 = ?$

 $3 - 1 = ?$


ESCOLA _____ DATA: ____/____/____

PROF: _____ TURMA: _____

NOME: _____



RESOLVA

 $4 - 2 = 2$

 $4 - 3 = ?$

 $5 - 4 = ?$

 $5 - 2 = ?$

 $5 - 3 = ?$

 $4 - 1 = ?$