

ESCOLA _____ DATA: ____/____/____


PROF: _____ TURMA: _____

NOME: _____

PROBLEMINHAS

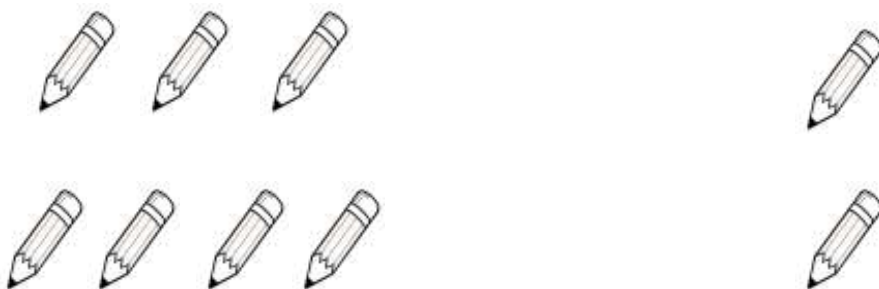
1. CARMINHA GANHOU 4 LIVROS. JÁ LEU 1. QUANTOS LIVROS AINDA FALTAM PARA CAMILA TERMINAR DE LER TODOS OS LIVROS?

$$\square - \square =$$



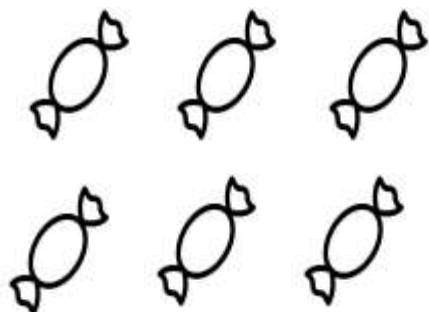
2. O PAI DE LARA COMPROU 7 LÁPIS. ELA JÁ USOU 2 LÁPIS. QUANTOS LÁPIS SOBRARAM?

$$\square - \square =$$





3. ANA CLARA COMPROU 6 BALAS. E JÁ CHUPOU 4. QUANTAS BALAS SOBRARAM?

$$\square - \square =$$



4. NA FAZENDA DA TIA CLARICE TEM 6 PASSARINHOS NA GAIOLA. NESSE FINAL DE SEMANA FUGIRAM 3. QUANTOS PASSARINHOS FICARAM?

$$\square - \square =$$



5. LORENA GANHOU 7 BATONS. QUEBROU 4. QUANTOS BATONS SOBRARAM?

$$\square - \square =$$

