

ESCOLA \_\_\_\_\_ DATA: \_\_\_\_/\_\_\_\_/\_\_\_\_


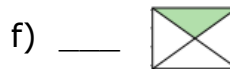
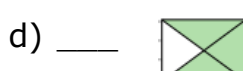
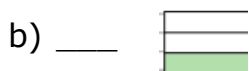
PROF: \_\_\_\_\_ TURMA: \_\_\_\_\_

NOME: \_\_\_\_\_



## Atividade de frações

1) Observe as imagens abaixo e complete com a fração equivalente:



2) Represente, por meio de figuras, as frações abaixo:

a)  $\frac{3}{10}$

e)  $\frac{2}{6}$

b)  $\frac{5}{8}$

f)  $\frac{3}{8}$

c)  $\frac{6}{7}$

g)  $\frac{3}{4}$

d)  $\frac{3}{5}$

h)  $\frac{2}{4}$

3) Escreva como se lê:

a)  $\frac{4}{10} =$

d)  $\frac{5}{7} =$

b)  $\frac{2}{5} =$

e)  $\frac{1}{4} =$

c)  $\frac{7}{8} =$

f)  $\frac{3}{6} =$